



THIRD SPACE
LEARNING

Mathematics

Paper 1

(Non-Calculator)

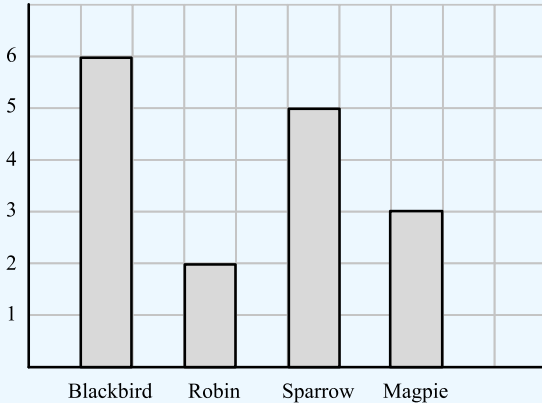
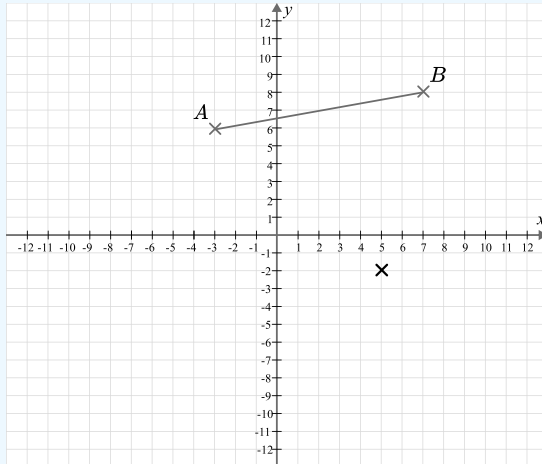
Foundation Tier

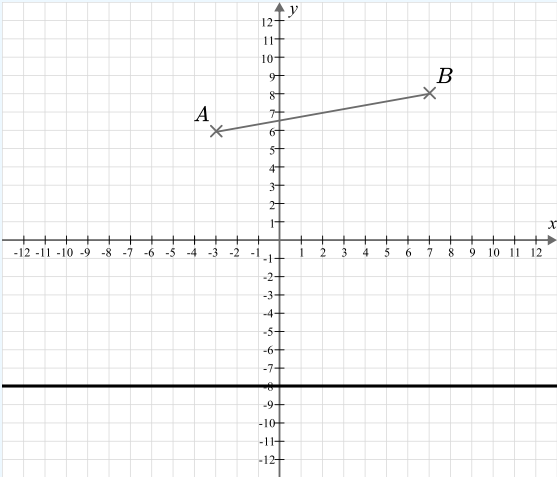
Mark Scheme

AQA GCSE

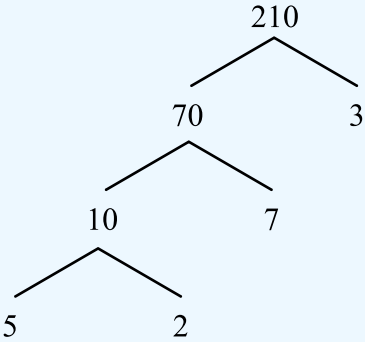
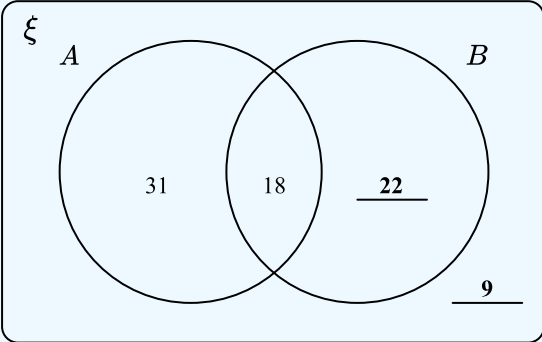
SET 5

Question	Working	Answer	Notes															
Q1a		301																
Q1b	$20 \times 7 = 140$ $4 \times 7 = 28$ $140 + 28 = 168$	168	M1 Attempt to use grid method, column method or other valid method A1 cao															
Q2a		35 centimetres																
Q2b		6000 grams																
Q2c		0.243 litres																
Q3a		5																
Q3b	3 4 5 5 5 6 6 7 9	5	M1 Orders values and attempts to find the middle A1 cao															
Q4a		32°																
Q4b		4cm																
Q5a		−40																
Q5b		−17																
Q6a	<table><tr><th>Bird</th><th>Tally</th><th>Frequency</th></tr><tr><td>Blackbird</td><td> </td><td>6</td></tr><tr><td>Robin</td><td> </td><td>2</td></tr><tr><td>Sparrow</td><td> </td><td>5</td></tr><tr><td>Magpie</td><td> </td><td>3</td></tr></table>	Bird	Tally	Frequency	Blackbird		6	Robin		2	Sparrow		5	Magpie		3		B1 At least 3 rows correct B1 Fully correct
Bird	Tally	Frequency																
Blackbird		6																
Robin		2																
Sparrow		5																
Magpie		3																

Question	Working	Answer	Notes
Q6b			M1 Labelling bird names on horizontal axis OR a linear scale on the vertical axis M1 At least 2 bars correct ft their frequency table A1 ft their frequencies or tallies in (a).
Q7a		$n = 9$	
Q7b		$p = 55$	
Q8	$30 - 16 = 14$ $16 : 14$	$8 : 7$	M1 $16 : 14$ A1 cao
Q9a			

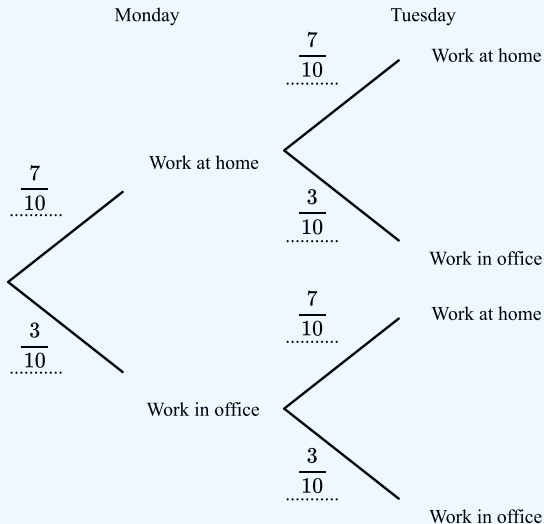
Question	Working	Answer	Notes
Q9b		(2, 7)	
Q9c			
Q10	$\frac{9}{15} + \frac{2}{15} = \frac{11}{15}$	$\frac{11}{15}$	M1 Correct use of a common denominator A1 $\frac{11}{15}$ oe
Q11	$\begin{aligned} p &= 3 \times 5 - 2 \times 12 \\ &= 15 - 24 \\ &= -9 \end{aligned}$	- 9	M1 Substitutes 5 and 12 into the expression A1 cao
Q12	$\begin{aligned} 83 \times 2.92 &\approx 80 \times 3 \\ &= 240 \end{aligned}$	240	M1 Rounds at least one value to 1sf A1 cao

Question	Working	Answer	Notes
Q13	Perimeter of rectangle $= 10 + 10 + 4 + 4 = 28$ Perimeter of triangle = 14 $14 - 3 = 11$ $11 \div 2 = 5.5$	$x = 5.5$	M1 Perimeter of rectangle = 28 M1 Perimeter of triangle = 14 M1 $14 - 3 = 11$ A1 ($x =$) 5.5 or $\frac{11}{2}$ oe
Q14	12 cupcakes = 100g sugar 6 cupcakes = 50g 30 cupcakes = $100 + 100 + 50$ = 250g sugar	250g	M1 Correct first step e.g. amount of sugar for 6 or 24 cupcakes A1 cao
Q15a	$2 \times 2 \times 2 \times 2 = 16$	16	
Q15b		1	
Q16a		$10y - 15$	
Q16b	$12x - 28 - 2x + 10$ $= 10x - 18$	$10x - 18$	M1 Both brackets correctly expanded A1 cao
Q16c		$x(x - 7)$	
Q17		Translation $\begin{pmatrix} -6 \\ 1 \end{pmatrix}$	B1 Translation B1 6 left and 1 up or given as a vector

Question	Working	Answer	Notes
Q18		$2 \times 3 \times 5 \times 7$	M1 Correct prime factors identified A1 cao
Q19	$40\% = 200$ $10\% = 50$ $90\% = 450$	450	M1 Finds 10% A1 cao
Q20a		22 9	B1 cao B1 ft their “22”, provided that their “22” + 31 + 18 < 80
Q20b		$\frac{18}{80}$ oe	

Question	Working	Answer	Notes																				
Q21	$g = 3f - 4$ $g + 4 = 3f$ $\frac{g + 4}{3} = f$	$f = \frac{g + 4}{3}$	M1 $g + 4 = 3f$ or $\frac{g}{3} = f - \frac{4}{3}$ A1 cao																				
Q22	<table border="1"> <thead> <tr> <th></th><th>Always true</th><th>Sometimes true</th><th>Never true</th></tr> </thead> <tbody> <tr> <td>$2n$ is odd</td><td></td><td></td><td>✓</td></tr> <tr> <td>n^2 is odd</td><td>✓</td><td></td><td></td></tr> <tr> <td>$n^3 + n$ is odd</td><td></td><td></td><td>✓</td></tr> <tr> <td>$(5n - 2)^2$ is odd</td><td>✓</td><td></td><td></td></tr> </tbody> </table>		Always true	Sometimes true	Never true	$2n$ is odd			✓	n^2 is odd	✓			$n^3 + n$ is odd			✓	$(5n - 2)^2$ is odd	✓				B1 for each correct answer
	Always true	Sometimes true	Never true																				
$2n$ is odd			✓																				
n^2 is odd	✓																						
$n^3 + n$ is odd			✓																				
$(5n - 2)^2$ is odd	✓																						
Q23	$\frac{11}{20}$ of 180 = 99 L : R = 3 : 2 = 15 : 10 R : T = 5 : 4 = 10 : 8 L : R : T = 15 : 10 : 8 $99 \div 33 = 3$ $15 \times 3 = 45$	45	M1 $\frac{11}{20}$ of 180 = 99 M1 Multiplies ratios to make R parts the same M1 Their “99” divided by their “33” A1 cao																				
Q24	$3.15 \times 10^4 = 31500$ $3.15 \times 10^{-2} = 0.0315$ $3.15 \times 10^{-1} = 0.315$ 3150 0.0315, 0.315, 3150, 31500	3.15×10^{-2} , 3.15×10^{-1} , 3150, 3.15×10^4	M1 Correctly converts at least two values from standard form or converts $3150 = 3.15 \times 10^3$ A1 cao																				

Question	Working	Answer	Notes
Q25	$360 = 60\%$ $60 = 10\%$ $600 = 100\%$	£600	M1 $360 = 60\%$ seen or implied A1 cao
Q26	Pentagon: $\frac{3 \times 180}{5} = 108$ Triangle: $\frac{180}{3} = 60$ $108 + 60 + 60 = 228$ $360 - 228 = 132$		M1 Interior angle of pentagon = 108 M1 $108 + 108 + 60 = 228$ A1 Full solution with no errors
Q27		$\frac{\sqrt{3}}{2}$	
Q28	$\frac{5^5 \times 5^{-2}}{5} = \frac{5^3}{5} = 5^2 = 25$	25	M1 Numerator simplified to 5^3 A1 cao
Q29	Area A: $\pi \times (\sqrt{13})^2 = 13\pi$ Area B: $\frac{1}{3} \times \pi \times 6^2 = 12\pi$	A	M1 $\pi \times (\sqrt{13})^2$ or $\pi \times 6^2$ M1 Correctly squares $\sqrt{13}$ and reaches 13π M1 Divides 36π by 3 to get 12π A1 Correct answer from correct working


Question	Working	Answer	Notes
Q30a	$p \times p = \frac{49}{100}$ $p = \sqrt{\frac{49}{100}} = \frac{7}{10}$ 		<p>M1 $p = \sqrt{\frac{49}{100}} = \frac{7}{10}$</p> <p>M1 $P(\text{work in office}) = \frac{3}{10}$</p> <p>A1 Correctly completed tree diagram</p>
Q30b	$P(\text{office, home}): \frac{3}{10} \times \frac{7}{10} = \frac{21}{100}$ $P(\text{home, office}): \frac{7}{10} \times \frac{3}{10} = \frac{21}{100}$ $\frac{21}{100} + \frac{21}{100} = \frac{42}{100}$	$\frac{42}{100}$ oe	<p>M1 for a correct probability for one day (e.g. “$\frac{3}{10}$” × “$\frac{7}{10}$” or “$\frac{7}{10}$” “$\frac{3}{10}$”)</p> <p>ft their value for p in pt (a)</p> <p>M1 ft their “$\frac{21}{100}$” × 2</p> <p>A1 cao</p>

Looking to improve your school's maths results without stretching your budget?

Tutoring from our spoken AI maths tutor Skye gives schools an even more affordable option for every pupil.

- ✓ 90% cheaper than other tutoring providers
- ✓ Curriculum-aligned lessons designed by qualified teachers
- ✓ Discounts available for long-term bookings and MATs

 thirdspacelearning.com

 0203 771 0095

 hello@thirdspacelearning.com

Where to go next?

For more GCSE maths revision resources and worksheets, visit the Third Space Learning [GCSE maths revision](#) pages. Or scan the QR code to discover our library of FREE GCSE maths revision resources:

